


Apple Varieties






After sampling the apple slices. Determine your top three favorites.
Assign points to your top three favorites:

- #1 - 3 points
- #2 - 2 points
- #3 - 1 point



Move to a small group. Add the points together from all the members of your group. Use these numbers to create a bar graph. Compare your bar graph to the bar graphs of other groups.

Is there a top favorite apple in your classroom?

19						
18						
17						
16						
15						
14						
13						
12						
11						
10						
9						
8						
7						
6						
5						
4						
3						
2						
1						
	Rome 	Granny Smith 	Fuji 	Red Delicious 	Gala 	Braeburn 